

*Every child is a different kind of flower.  
All together they make this world a beautiful garden.  
So, Nurture them and care for them.*

Dear Parents

Kindly note that summer vacations for your ward will be 1<sup>st</sup> June to 2<sup>nd</sup> July 2023. School will be reopen on 3<sup>rd</sup> July 2023 at usual time.

We are sharing with you a few parenting tips which will help your ward to be civilized and achieve their goals in coming time.

## **PARENTING TIPS**

1. **Respect your child.**
2. **Show unconditional Love.**
3. **Adapt and adjust with time.**
4. **Motivate and appreciate.**
5. **Avoid harsh Behaviour.**
6. **Set routine for your child.**
7. **Be steady with your child.**
8. **Develop healthy dietary habits.**
9. **Cultivate your child's Independence.**



10. **Don't compare your child.**
11. **Be a friend to your child.**
12. **Spend quality time with your child.**
13. **Stay connected to school.**
14. **Talk good about school & teachers.**
15. **Use refined language with your child.**
16. **Monitor your child and behavioural aspect.**
17. **Create a disciplined & positive environment at home.**
18. **Encourage your child.**

**Hoping for Your Positive Response and Cooperation.**



# M.R. CITI SR. SEC. PUBLIC SCHOOL

## HOLIDAY HOMEWORK

CLASS - IV



Meditate



No TV, Spend  
time with family




Healthy eating



Exercise daily

JUDICIOUS USE OF  
YOUR HOLIDAYS



Pick up a new hobby



Eat together stays together



No long hours on mobile phone

# ACTIVITY CORNER



“Healthy mind lives in a healthy body”

*Practice Yoga to be fit throughout life.*

Yoga Day

“A son’s first hero, a daughter’s first love”

Express your love for your father by making a beautiful card on Father’s Day



Father’s Day



“Let’s nurture the nature so that we can have a better future”

Environment Day

*Plant Tree and Save Earth*

**M.R. CITI PUBLIC SCHOOL, BALACHAUR**  
**CLASS-IV**  
**HOLIDAYS ASSIGNMENT- 2023-2024**

**GENERAL INSTRUCTION –**

1. The Holidays home work must be done in a very neat and presentable manner. Questions must be done in the given sequence.
2. The child will be assessed for the presentation, neatness, completion of all the given questions and timely submission.
3. For the project, wherever it is mentioned, strictly adhere to the instructions.
4. Complete the work on A-4 size sheet or on a separate notebook.
5. Involve your parents or guardian while using scissors for making models.
6. Last but not least revise all the content given in notebook as it will help you for future assessments.

**SUBJECT ENGLISH**

**Q1. : Look at the following words in a dictionary and write its meaning and frame sentence of each of the given word-**

*(First one is done for you as an example)*

**eg. -** bungalow- a one-storey house

Sentence- My grandparents live in a bungalow.

- delicious
- cottage
- nervous
- conscious
- adventure



**SPEAKING SKILLS**

***Holidays are the best time for self practice and self improvement.***

**Q- 1:** You have to write a talk lines about your day or week. Capture a moment on camera and talk about it for one minute.

Take an image of any interesting activity that you enjoy like, watching a **spider web in the garden, playing games or doing exercises with your sibling, any cooking activity, time spent with your grandparents etc.** You can click the photograph, paste it in the scrapbook and write five to six sentences on it.



## LISTENING SKILLS

❖ Here is a story about Jimmy's birthday party.

Click on the given link. Listen the complete story and write the answers to the questions given below.

<https://www.youtube.com/watch?v=fPsdF059akk>













1. What was the occasion of celebration? Why?
2. Which all games did kids play in the party?
3. Write any two: - common, proper nouns from the story.



## WRITING SKILLS

Q-1: Complete and re-write the story by taking help from the hints given-

horses	village	cat	dogs	milk	kittens
hay	pond	grandmother	cow	cock	hen

In June we went to a \_\_\_\_\_   
 where my \_\_\_\_\_  lives. She has a farm.  
 On her farm there are many animals. There are two  
 \_\_\_\_\_ , a \_\_\_\_\_  with  
 its \_\_\_\_\_ , three \_\_\_\_\_   
 one \_\_\_\_\_  as well as a \_\_\_\_\_   
 and a \_\_\_\_\_ . Every morning she  
 feeds her animals with \_\_\_\_\_   
 or \_\_\_\_\_ . They drink water from a  
 \_\_\_\_\_  on the farm.

Q-2: Can you find 5 differences in the picture? Write about them-



eg.

1. In first picture, the mirror is oval in shape. However, in second picture, the mirror is rectangular.

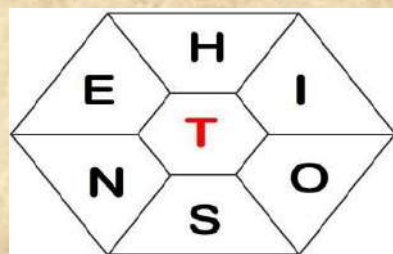
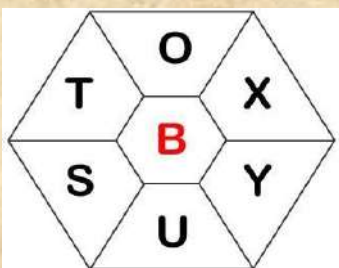
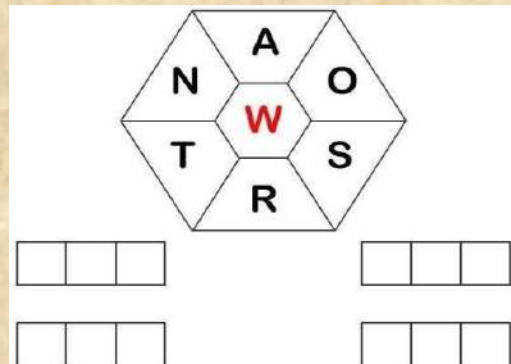
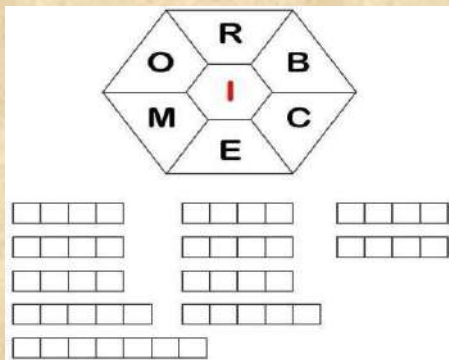
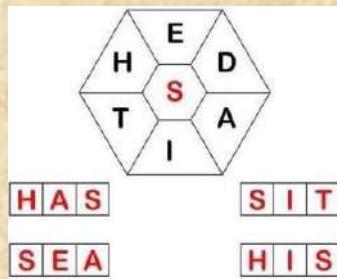


LEARN WITH FUN

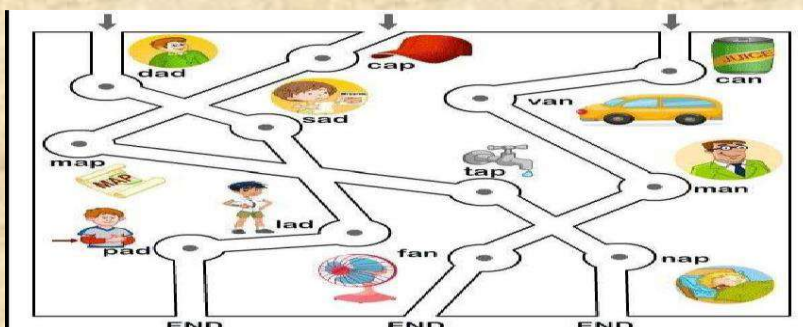
*What we learn with pleasure, we never forget!*

**Q-1:** Make a new word by combing the letters in the hexagon. The central red letter should be kept common every time-

*(First one is done for you as a example)*



**Q-2:** Follow the maze and connect the rhyming words-





## PROJECT- FAMILY TIME

*Make a chart on 'NOUNS' and its type*



### SPELLBEE

S.NO.	ENGLISH	MATHEMATICS	SCIENCE	SOCIAL STUDIES
1.	creature	identify	digestion	craters
2.	folklore	organize	carbohydrates	constellation
3.	independent	spent	oesophagus	neighbour
4.	eagerly	estimate	deficiency	planet
5.	agricultural	distribute	anaemia	continents
6.	binocular	quotient	brittle	utensils
7.	chameleon	equivalent	goitre	environment
8.	certainly	bought	calorie	government
9.	Muhammad	convert	incisors	capital
10.	buttercup	remainder	stomach	ocean

*\* (learn the above mentioned words)*

## Subject - Social Studies

1. What we call the southern part of India?
2. Name the water bodies which surround India.
3. Name the glacier from which Ganga and Yamuna originates.
4. Name the neighbouring countries that across the sea.
5. What is the approximate height of Mount Everest?
6. Name the second highest peak in the world.
7. Why Ganga basin is called the food bowl of India?
8. What is alluvium?
9. What is a delta?
10. Name the largest delta in the world.
11. Where is Kumbh Mela held?
12. What we find in a desert?
13. What is basin?
14. Name five physical divisions of India.
15. Why are Northern Plains so fertile?
16. List the states that lie in Northern Plains.

### Activity –

Fill states and their capitals in political map of India.

**Project** – Paste pictures on scrapbook related to Life of the People in Southern Plateau and in Coastal Plains.

## Subject-Science

1. Make a table and complete it.

Nutrients	Source	Deficiency
Vitamin A		
Vitamin C		
Vitamin D		
Iodine		
Calcium		
Iron		

2. Draw four Types of Teeth.
3. Give two examples of food items containing Roughage.
4. What is plaque?
5. How can you protect your teeth?
6. Name the organs of digestive system.
7. Name an important function of
  - a) Carbohydrates
  - b) Vitamins
  - c) Proteins
  - d) Fats
8. Write an important function of
  - a) Small Intestine
  - b) Large Intestine
  - c) Anus
9. Differentiate between Temporary and Permanent Teeth.
10. What are the functions of Teeth?

### Project:

1. Make a model of the digestive system (Roll No. 1 to 10)
2. Make a chart on different types of teeth. (Roll No. 11 to 20)
3. Prepare a first aid box (Roll No. 31 to 40)

### Activity

Do an experiment by germinating seeds (black gram or moong Dal or green grams)

## Subject - Maths

### Chapter-1 (Place Value)

1. Write the place value of the underlined digits 364789.
2. Mark the periods and write the number name also 249836.
3. Write the expanded form 793468.
4. Write the successor and predecessor of 936548
5. Write the short form  
 $50000 + 30000 + 7000 + 200 + 10 + 5$
6. Rearrange the numbers in ascending order  
36,942    21,468    5,93,621    1,462
7. Write the successor of greatest 4 – digit number.
8. Write the predecessor of greatest 6 – digit number.
9. Round off the following nearest to 10
  - i) 364
  - ii) 5698



10. Round off the following nearest to 100  
i) 7432            ii) 35486
11. Round off the following nearest to 1000  
i) 23641            ii) 89243
12. Write in Roman numerals.  
i) 72                ii) 26
13. Write in Hindu Arabic numerals.  
i) XXVII            ii) XC

## CHAPTER-2 (ADDITION AND SUBTRACTION)

1. Fill in the blanks.  
i)  $3247 + 0 =$  \_\_\_\_\_  
ii)  $5683 - 5683 =$  \_\_\_\_\_  
iii)  $24198 + 100 =$  \_\_\_\_\_  
iv)  $79864 - 0 =$  \_\_\_\_\_  
v)  $4792 + 1 =$  \_\_\_\_\_
2. Add 36418 and 28320
3. Estimate the sum  $74321 + 36248$  to the nearest to 100.
4. What number 364 more than 24512?
5. Subtract 23498 from 56899.
6. Find the difference between 32436 and 68742.
7. Subtract and check your answer  $72984 - 32491$
8. Solve the following  
 $24301 + 53369 - 32124$
9. What should be added to 56348 to get 67448?
10. The sum of two numbers is 66478 if one number is 23162. What is the other number?

## Chapter-3 (MULTIPLICATION)

1. Fill in the blanks.  
i)  $8 \times \underline{\quad} = 40$   
ii)  $326 \times 100 =$  \_\_\_\_\_  
iii)  $58 \times \underline{\quad} = 580$   
iv)  $240 \times \underline{\quad} = 0$   
v)  $7 \times \underline{\quad} = 84$
2. Find the product of  $276 \times 4$ .
3. Arrange in column and multiply  $684 \times 13$
4. Multiply  $34 \times 16$  by using lattice multiplication.
5. Multiply 238 by 124
6. A book contains 530 pages. How many pages are there in 42 books?
7. The cost of one door is Rs. 2340. Find the cost of 115 doors.
8. If the cost of one T.V is Rs. 15000. What is the cost of 120 T.V.?

9. Simplify the following

$$3 \times 6 + 4 \times 5$$

10. Solve the following


$$(10 \times 50) \times 80$$

## **MENTAL ABILITY QUESTIONS**

1. Form the greatest 5-digits numbers using different digits.
2. How many tens make ten lakh?
3. How much less is 200 than 650?
4. What is the half of 600?
5. What is the double of 3000?
6. What is the sum if 25 is added to itself 10 times?
7. Find the missing digits.  
8, 13, 20, 29, \_\_\_
8. How many days are there in month of July, September?
9. The product of two numbers is 35. If one number is 7. Find the other.
10. The age of father is 45 and the age of son is 25 less than his father. Find the age of son.

ਵਿਸ਼ਾ: ਪੰਜਾਬੀ

1. ਹੇਠ ਦਿੱਤੀ ਤਸਵੀਰ ਨੂੰ ਵੇਖ ਕਿ ਅੱਠ -ਦਸ ਸਤਰਾਂ ਲਿਖੋ।



2. ਹੇਠ ਦਿੱਤੀ ਤਸਵੀਰ ਨੂੰ ਧਿਆਨ ਨਾਲ ਦੇਖੋ ਤੇ ਦੱਸੋ ਕਿ ਇਹ ਤਸਵੀਰ ਕਿਹੜੀ ਥਾਂ ਦੀ ਹੈ ਇਸ ਬਾਰੇ ਲਿਖੋ।



3. ਪਿਤਾ ਦਿਵਸ ਦੇ ਮੌਕੇ ਤੇ ਆਪਣੇ ਪਿਤਾ ਜੀ ਲਈ ਕਾਰਡ ਬਣਾਉ।

4. ਹਫਤੇ ਦੇ ਦਿਨਾਂ ਦੇ ਨਾਂ ਲਿਖੋ।

5. ਬੋਲ ਲਿਖਤ

1. ਭੁੱਖੀ-ਭਾਣੀ

2. ਸੂਤ

3. ਮੁਸਾਫਰ

4. ਰੁਝੇਵਿਆਂ

5. ਰੱਸੀ ਟੱਪਾ

6. ਕਤਾਰਾਂ

7. ਕਿਆਰੀਆਂ

8. ਸਿਰਿਆ

9. ਮਿਥੀ

10. ਗੁਣਵਾਣ

विषय- हिंदी  
ग्रीष्मावकाश कार्य(2023-2024)

( पाठ्यपुस्तक)

1. निम्नलिखित कठिन शब्दों के अर्थ लिखें:-

1. झब्बर
- 2.सूंड
- 3.कूबड़
- 4.नक्कारखाना
- 5.संतोषजनक
- 6.अभिमान
- 7.नाक- भौंह सिकोड़ना
- 8.तिमजिली
- 9.बरामदा
- 10.किरमिच

2. प्रश्न उत्तर:-

1. बीरबल कैसा व्यक्ति था?
2. चिक पर्दे का काम करती है। चिक और परदे में क्या फर्क होता है ?अपने शब्दों में लिखें।
3. चिक से बनी हुई किन्हीं पांच वस्तुओं के नाम लिखें।
4. 'जैसा सवाल वैसा जवाब' कहानी से आपको क्या शिक्षा मिलती है? अपने शब्दों में लिखें।
5. अकबर बीरबल की किन्हीं दो कहानियों को याद करें।

( व्याकरण भाग)

1. संज्ञा से संबंधित एक चार्ट तैयार करें।
2. व्यक्तिवाचक संज्ञा के पाँच उदाहरण लिखो । 3.जातिवाचक संज्ञा के पाँच उदाहरण लिखो
- 4.लिंग और स्त्रीलिंग के उदाहरण लिखो।
5. व्याकरण के भेदों के नाम लिखो।

( रचनात्मक कार्य)

1. पेड़ का चित्र बनाकर पेड़ों पर एक कविता लिखो।
2. ' वातावरण दिवस 'से संबंधित एक निबंध लिखें।
3. पापा ने जितने काम सोचे,उनमें से तुम्हें सबसे दिलचस्प काम कौन सा लगता है? क्यों? अपने शब्दों में लिखें।